

TRIGONOMETRY

SINE, COSINE, AND TANGENT

TRIGONOMETRIC RATIOS

Sine

Opposite

Hypotenuse

Cosine

Adjacent

Hypotenuse

Tangent

Opposite

Adjacent

$$\sin A = \frac{\text{opp}}{\text{hyp}} \text{ or } \frac{a}{c}$$

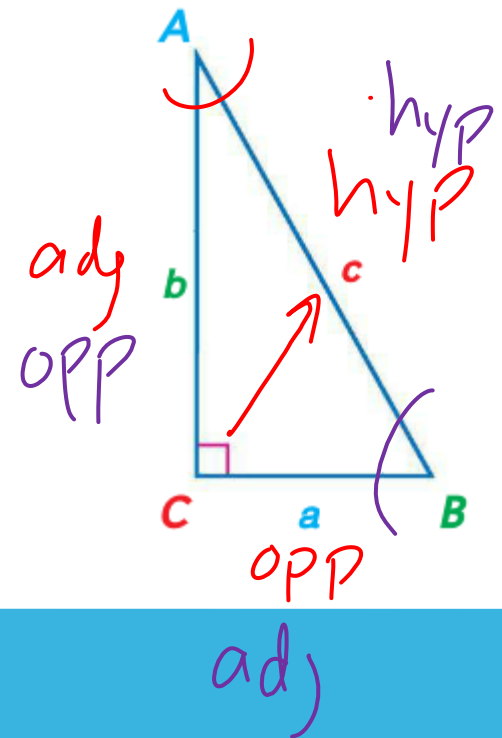
$$\sin B = \frac{\text{opp}}{\text{hyp}} \text{ or } \frac{b}{c}$$

$$\cos A = \frac{\text{adj}}{\text{hyp}} \text{ or } \frac{b}{c}$$

$$\cos B = \frac{\text{adj}}{\text{hyp}} \text{ or } \frac{a}{c}$$

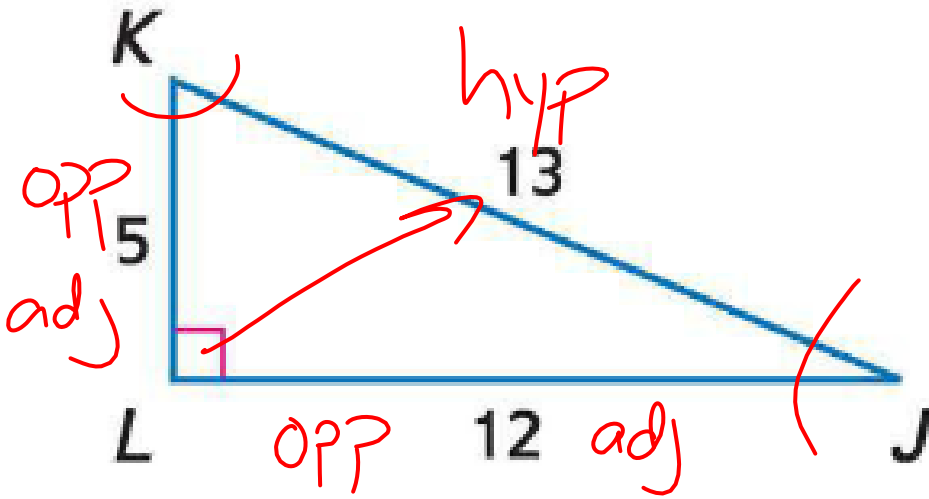
$$\tan A = \frac{\text{opp}}{\text{adj}} \text{ or } \frac{a}{b}$$

$$\tan B = \frac{\text{opp}}{\text{adj}} \text{ or } \frac{b}{a}$$



EXAMPLES

Find $\sin J$, $\cos J$, $\tan J$, $\sin K$, $\cos K$, and $\tan K$. Express each ratio as a fraction and as a decimal to the nearest hundredth.



$$\sin J = \frac{5}{13} = .38$$

$$\cos J = \frac{12}{13} = .92$$

$$\tan J = \frac{5}{12} = .42$$

$$\sin K = \frac{12}{13} = .92$$

$$\cos K = \frac{5}{13} = .38$$

$$\tan K = \frac{12}{5} = 2.4$$

EXAMPLES

$$\sin J = 5/13 = .38$$

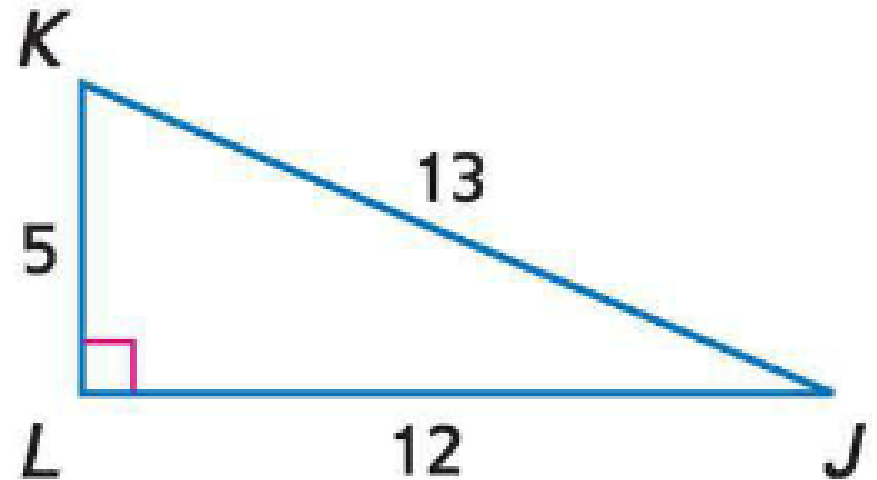
$$\cos J = 12/13 = .92$$

$$\tan J = 5/12 = .42$$

$$\sin K = 12/13 = .92$$

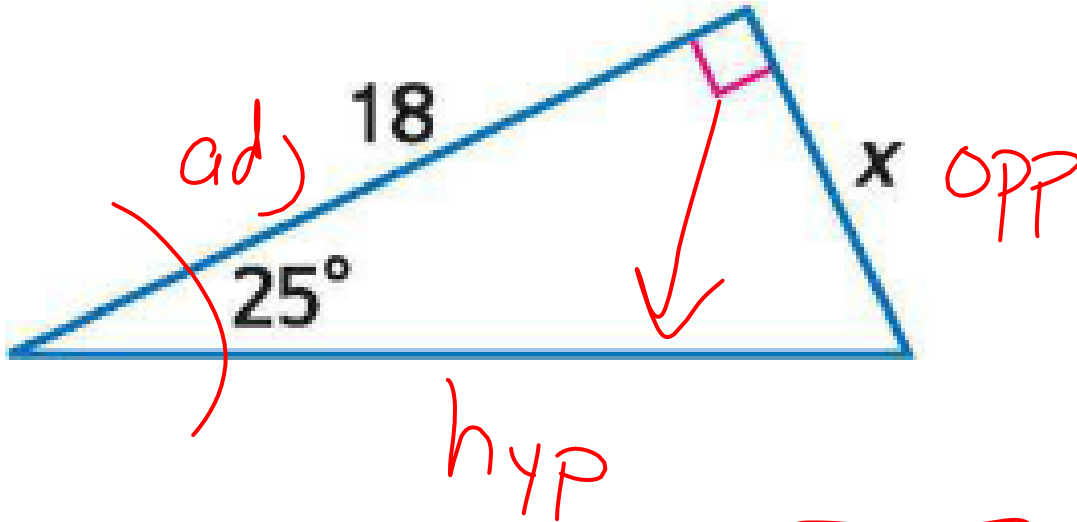
$$\cos K = 5/13 = .38$$

$$\tan K = 12/5 = 2.4$$



EXAMPLES

Find x to the nearest hundredth.



$$18 \cdot \tan 25 = \frac{x}{18}$$

$$18 \tan 25 = x$$

$\tan 25$

$25 \tan$

RAD

DEG

.4663

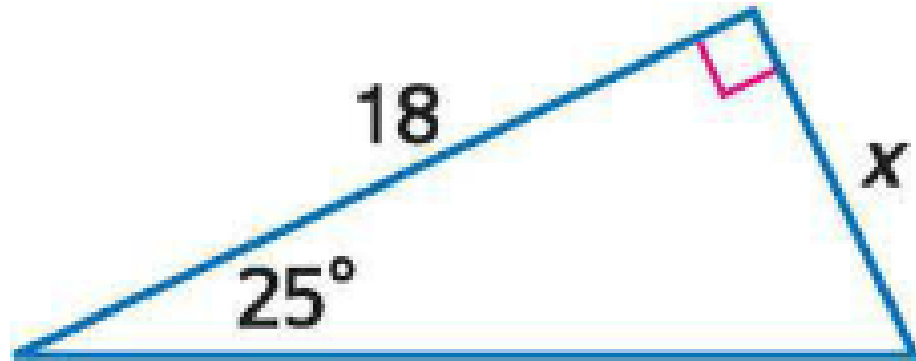
EXAMPLES

Find x to the nearest hundredth.

$$\tan 25 = x/18$$

$$18 \cdot \tan 25 = x$$

$$x = 8.39$$



$$\tan(25) \times 18$$

$$18 \times \tan 25$$

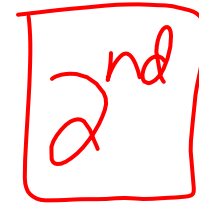
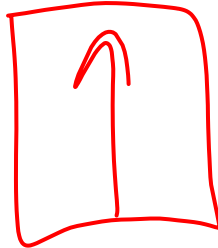

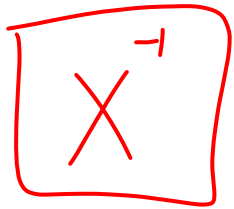
INVERSE TRIGONOMETRIC RATIOS

Inverse trigonometric ratios give the measure of the angle.

$$\sin^{-1} x = m\angle A$$

$$\cos^{-1} x = m\angle A$$

$$\tan^{-1} x = m\angle A$$



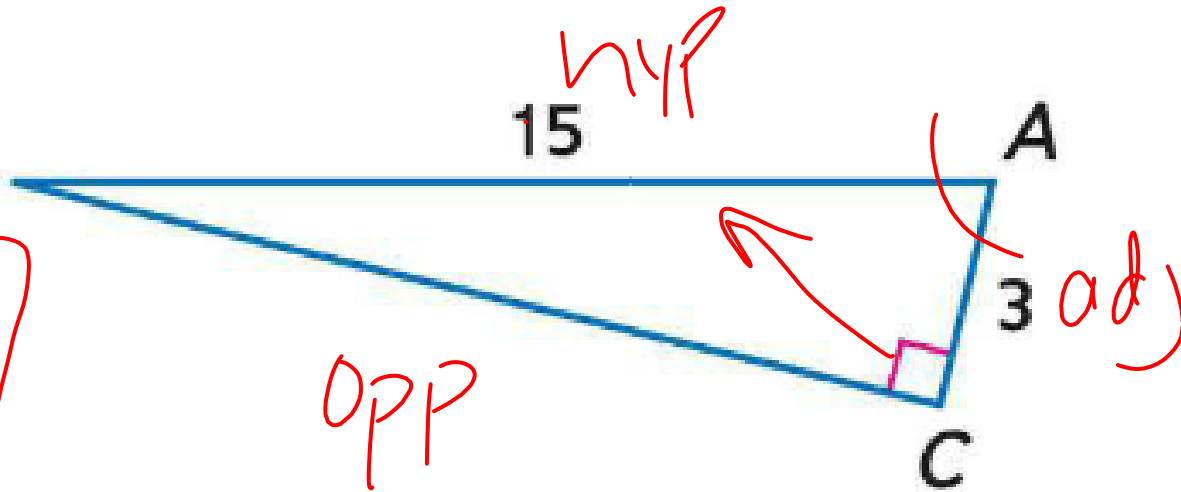
EXAMPLES

Use a calculator to find the measure of $\angle A$ to the nearest tenth.

$$\cos A = \frac{3}{15}$$

$$\cos^{-1} \frac{3}{15} = A$$

$$A = 78.5$$



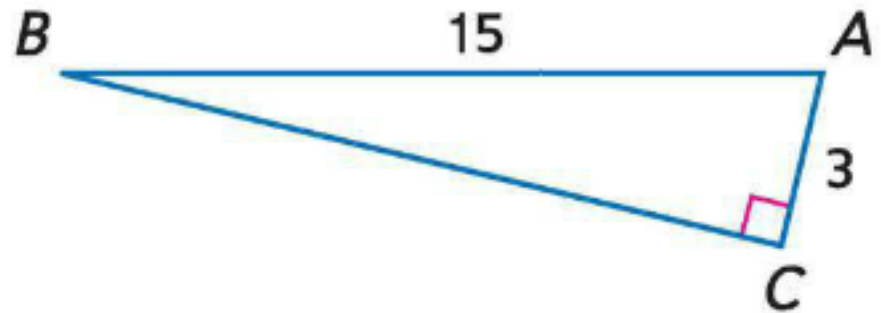
EXAMPLES

Use a calculator to find the measure of $\angle A$ to the nearest tenth.

$$\cos A = 3/15$$

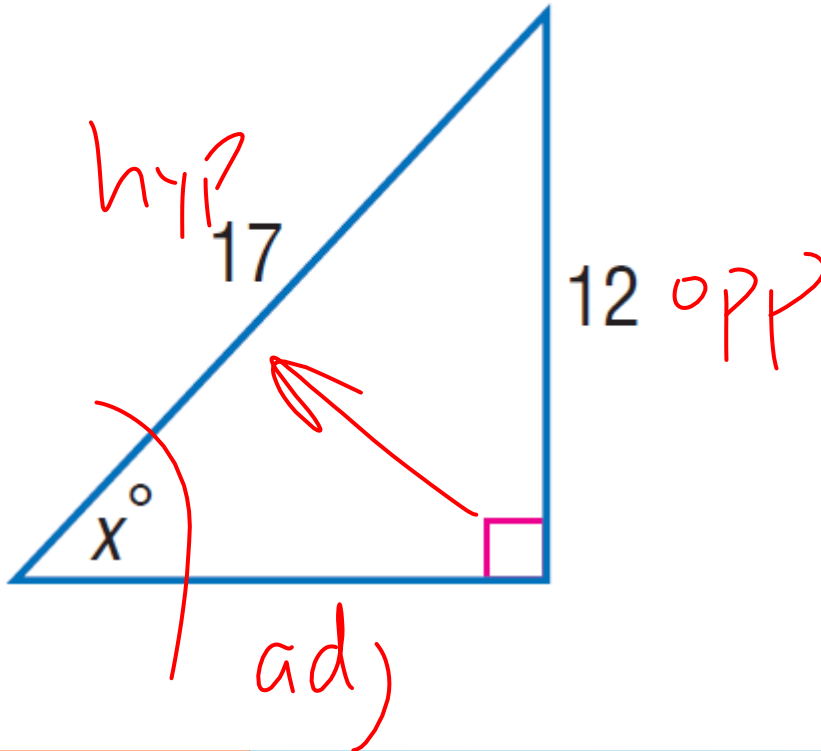
$$\cos^{-1}(3/15) = A$$

$$A = 78.5$$



EXAMPLES

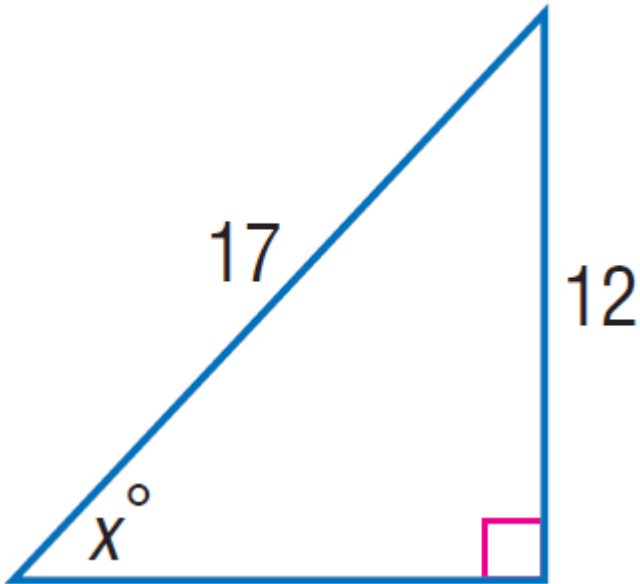
Find x . Round to the nearest tenth.



$$x = 44.9$$

EXAMPLES

Find x . Round to the nearest tenth.



$$\sin x = \frac{12}{17}$$

$$x = \sin^{-1} \frac{12}{17}$$

$$x = 44.9$$

SOLVING A RIGHT TRIANGLE

To solve a right triangle, you need to know:

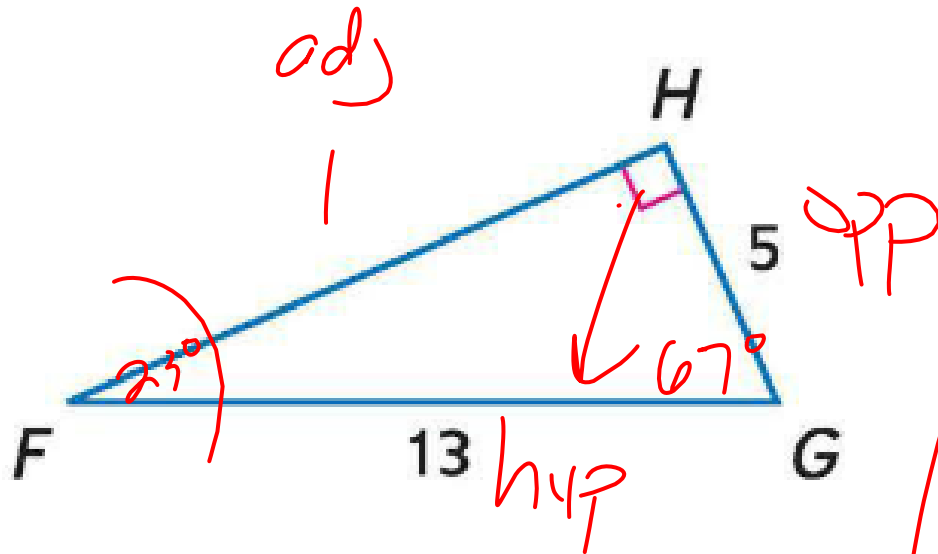
Two side lengths or

One side length and the measure of one acute angle



EXAMPLES

Solve the right triangle. Round side measures to the nearest tenth and angle measures to the nearest degree.



$$\sin F = \frac{5}{13}$$

$$\sin^{-1} \frac{5}{13} = F = 23^\circ$$

$$A^2 + B^2 = C^2$$

$$x^2 + 5^2 = 13^2$$

$$x^2 + 25 = 169$$

$$\sqrt{x^2} = \sqrt{144}$$

$$x = 12$$

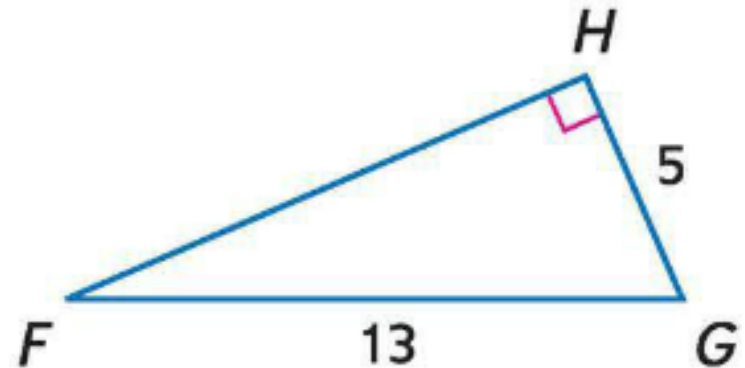
EXAMPLES

Solve the right triangle. Round side measures to the nearest tenth and angle measures to the nearest degree.

$$HF = 12$$

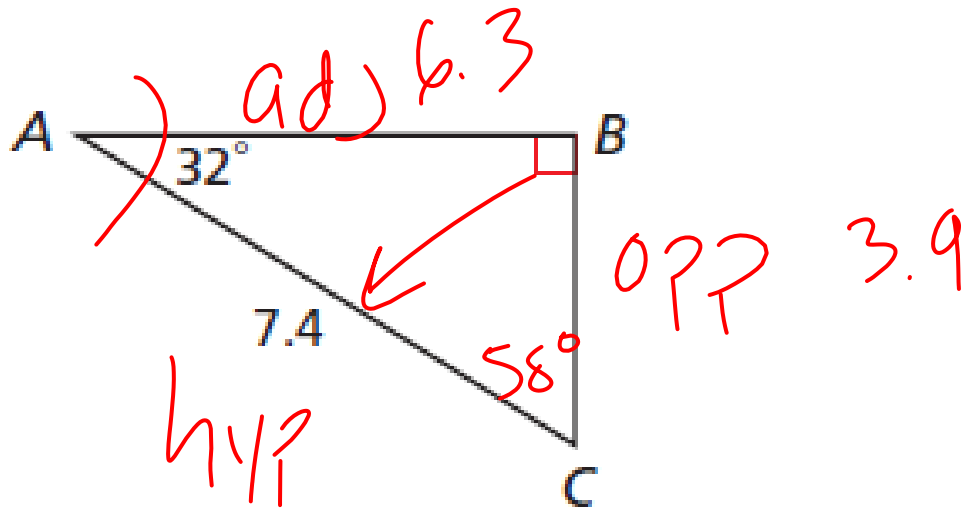
$$\angle F = \sin^{-1} 5/13 = 22.6 = 23$$

$$\angle G = \cos^{-1} 5/13 = 67.4 = 67$$



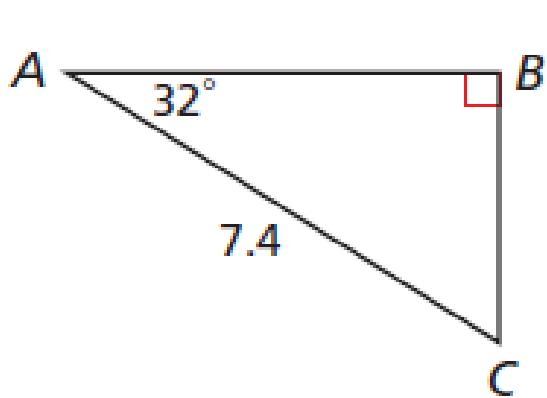
EXAMPLES

Solve the right triangle. Round side measures to the nearest tenth and angle measures to the nearest degree.



EXAMPLES

Solve the right triangle. Round side measures to the nearest tenth and angle measures to the nearest degree.



$$AB: \cos 32 = \frac{AB}{7.4}$$

$$AB = 7.4 \cos 32$$

$$AB = 6.3$$

$$BC: \sin 32 = \frac{BC}{7.4}$$

$$BC = 7.4 \sin 32$$

$$BC = 3.9$$

$$\angle C = 90 - 32 = 58$$