

Name: _____

Per: _____

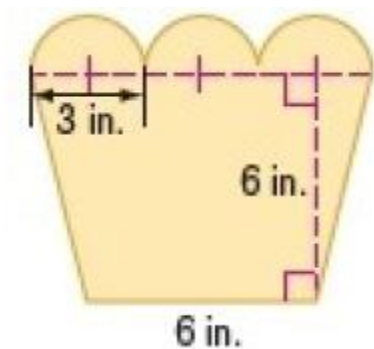
POINTS: _____

Homework #23-24 Quiz

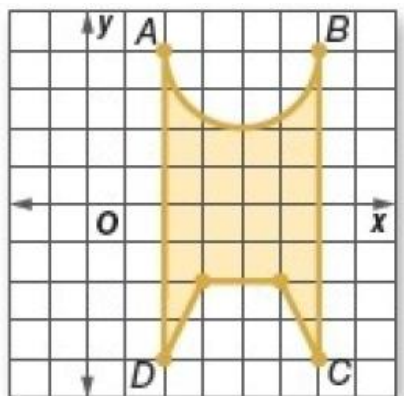
Be sure to include your work when appropriate.

Find the area. Round to the nearest tenth if necessary.

1.



2. Find the area of the shaded region. Round to the nearest tenth if necessary.



Name: _____

Per: _____

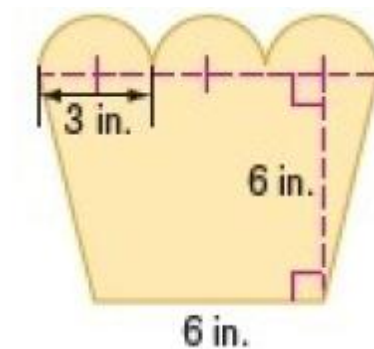
POINTS: _____

Homework #23-24 Quiz

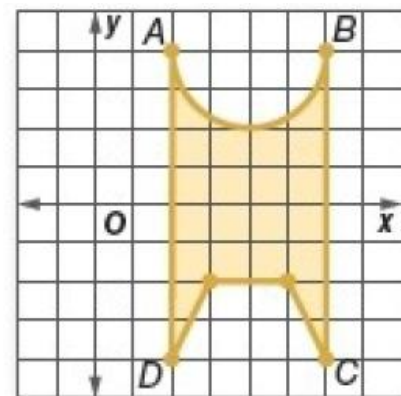
Be sure to include your work when appropriate.

Find the area. Round to the nearest tenth if necessary.

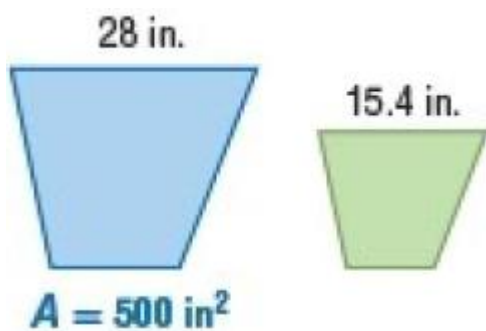
1.



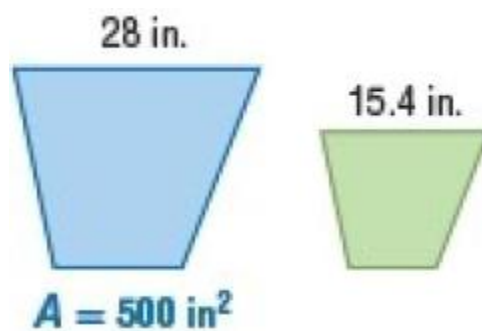
2. Find the area of the shaded region. Round to the nearest tenth if necessary.



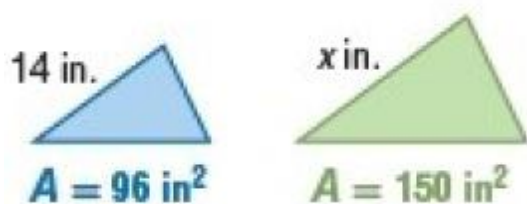
3. For each pair of similar figures, find the area of the figure on the right.



3. For each pair of similar figures, find the area of the figure on the right.



4. For each pair of similar figures, use the given areas to find the scale factor of the left figure to the right figure. Then find x .



4. For each pair of similar figures, use the given areas to find the scale factor of the left figure to the right figure. Then find x .

