

Pre-AP Geometry

Name: \_\_\_\_\_

Per: \_\_\_\_\_

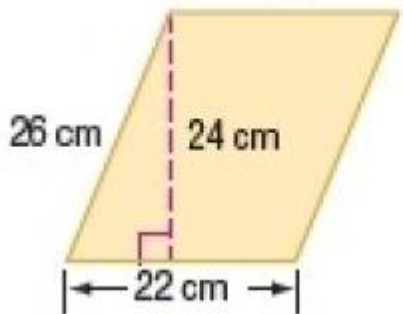
POINTS: \_\_\_\_\_

Homework #22-23 Quiz

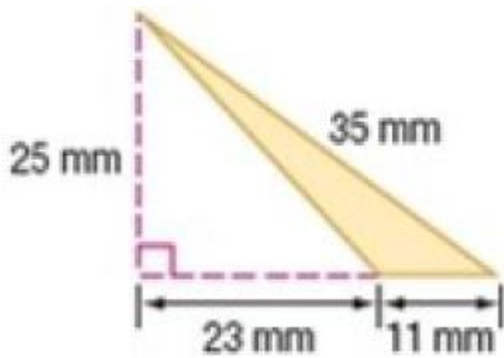
Be sure to include your work when appropriate.

Find the perimeter and area. Round to the nearest tenth if necessary.

1.



2.



Pre-AP Geometry

Name: \_\_\_\_\_

Per: \_\_\_\_\_

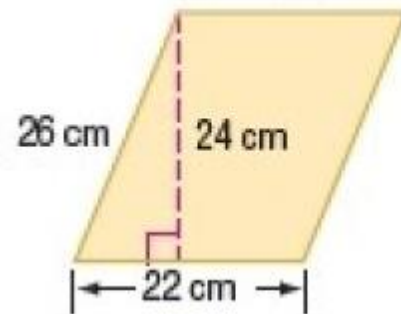
POINTS: \_\_\_\_\_

Homework #22-23 Quiz

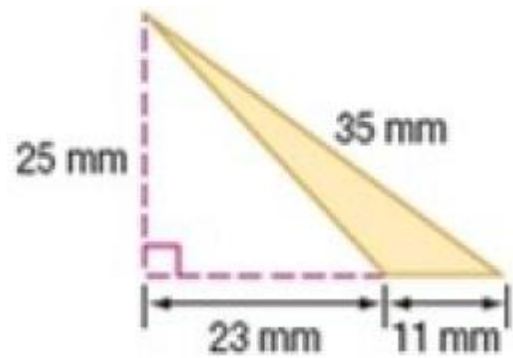
Be sure to include your work when appropriate.

Find the perimeter and area. Round to the nearest tenth if necessary.

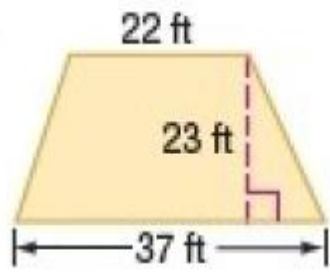
1.



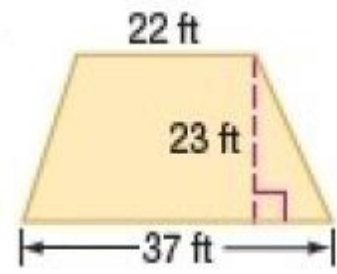
2.



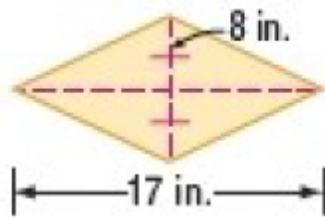
3.



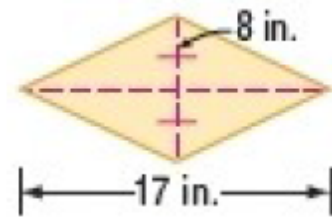
3.



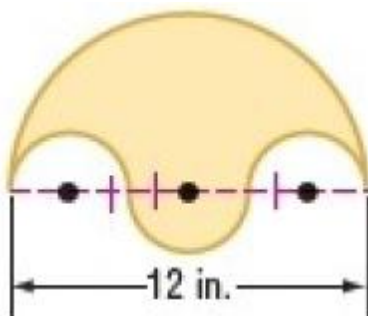
4.



4.



5.



5.

